


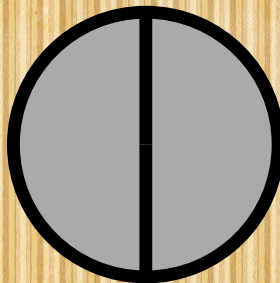




Zwickzack

Mappe



Brüche

Ordne richtig zu!



$$\frac{2}{4}$$

$$\frac{1}{5}$$

$$\frac{2}{2}$$

$$\frac{2}{3}$$

$$\frac{3}{4}$$

$$\frac{7}{8}$$

$$\frac{5}{6}$$

$$\frac{2}{8}$$

$$\frac{5}{8}$$

ein Ganzes

drei Siebtel

ein Halbes

ein Drittel

fünf Achtel

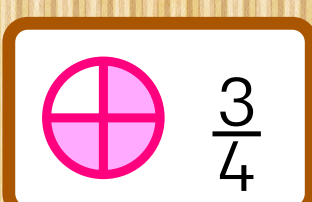
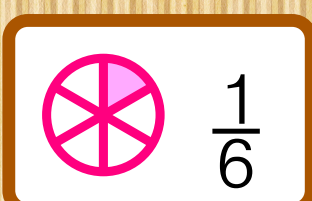
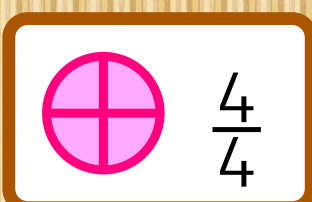



zwei Viertel

ein Sechstel

drei Viertel

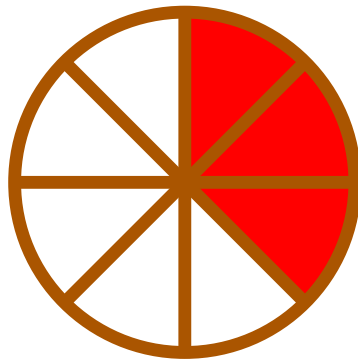
Wie spricht man den Bruch richtig aus? Finde das passende Kärtchen!

Eine kleine Falle hat sich versteckt. Kannst du es trotzdem lösen?



Zwickzack

Mappe



Brüche

benennen